



MADHAV INTERNATIONAL SCHOOL

Affiliated to the Council for Indian School Certificate Examinations (CISCE) - GU031/2014
Pranaminagar, Vastral, Ahmedabad-382418, Gujarat
Ph. +91-079-29292753 | Email: admin@madhavinternationalschool.org

EvaluationN – 4 Worksheet (2018 -19)

GRADE: K 1 Sub: ENGLISH

NAME: _____
Roll No: _____ /Sec: _____

Date: _____
Marks: _____

Q.1 See the picture and arrange the jumbled words



guj



owc



abt



tac




ubs



nte



odg



anc

Q.2 (Conversation) the cow

Fill in the blanks

Cow is a _____ animal (domestic, wild)

The cow gives us _____ (milk, water)

It has _____ legs (four, six)

It has _____ eyes (two, one)

It has _____ tail (one, four)

It has _____ ears (two, five)

It has _____ horns (six, two)

Q.3 missing letters (a-z)

a _____ c _____ e _____

g _____ i _____ k _____ m _____

o _____ q _____ s _____ u _____

w _____ y _____

Q.4 circle the vowels.

a b c d e f g h


I j k l m n o p


q r s t u v w x

y z

Q.5 Use this / that

_____ is a cap _____ →




_____ is a ball 

_____ is a star _____ →



_____ is a pencil _____ →



_____ is a house 

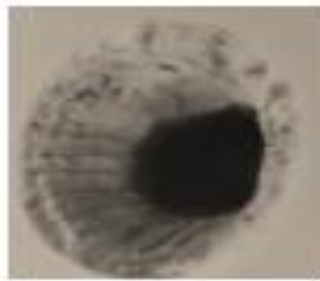
_____ is a can. 

Q.6 Identify the picture and write the correct spelling (Hen, hat, cap, dot, bin, sun, log, pen, fan, hut)











Q.7 After letter

b _____

D _____

F _____

G _____

L _____

Q _____

H _____

t _____

r _____

N _____

m _____

a _____

Evaluation – 4 Worksheet (2018 -19)

GRADE: K 1 Sub: Math

Q.1 Write number names of given numbers.

16

5

12

13

20

9

11

15

18

17

1

13

2

7

6

14

4 _____

3 _____

Q.2 Backward Numbers:

20		18		16		14		12	
10		8		6		4		2	

Q.3 Write after number:

42 _____ 12 _____ 15 _____

18 _____ 29 _____ 16 _____

24 _____ 35 _____ 49 _____

11 _____ 22 _____ 40 _____

19 _____ 17 _____ 10 _____

43 _____ 22 _____ 43 _____

47 _____ 37 _____ 7 _____

13 _____ 31 _____ 44 _____

Q.4 Write before number:

_____ 12 _____ 16 _____ 19

_____ 26 _____ 37 _____ 48

___ 35

___ 29

___ 41

___ 45

___ 17

___ 9

Q.5 Write between number:

1 ___ 2

13 ___ 15

20 ___ 22

26 ___ 28

18 ___ 20


31 ___ 33

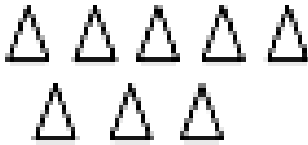
48 ___ 50

40 ___ 42

44 ___ 46

Q.6 Count the objects and write the number:





Q.6. Addition:

1	4	2	5	2	3	5
+ 2	+ 1	+ 3	+ 2	+ 2	+ 1	+ 1
<input type="text"/>	<input type="text"/>	<input type="text"/>	<input type="text"/>	<input type="text"/>	<input type="text"/>	<input type="text"/>

3	8	7	4
+ 5	+ 1	+ 2	+ 3
<input type="text"/>	<input type="text"/>	<input type="text"/>	<input type="text"/>

Q.7 Subtract:

2	4	6	7	9
- 1	- 2	- 3	- 4	- 2
<input type="text"/>	<input type="text"/>	<input type="text"/>	<input type="text"/>	<input type="text"/>